

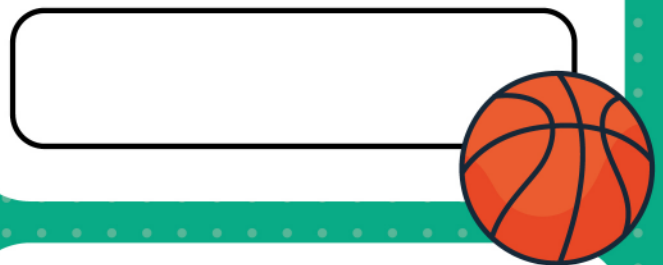
Know your numbers

Want a gold medal? See if you can get all five questions right!

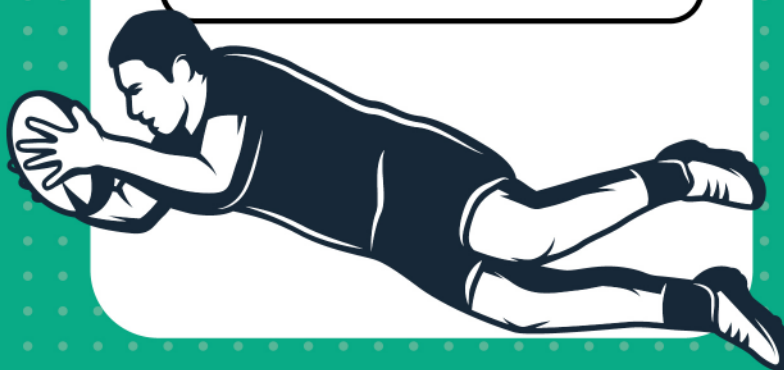
1. What is the name of the black shapes on a standard soccer ball?




2. How many black seams are on a basketball?




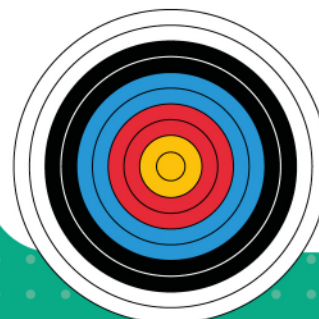
3. A try in rugby is worth 5 points. A penalty in rugby is worth 3 points. Team A scored 3 tries and 3 penalties. Team B scored 2 tries and 4 penalties. Which team has more points?



4. How many pool balls are there in a set – including the white one?



5. How many colours are there on an archery target?



ANSWERS ON PAGE 34