









Ladybug maths

These ladybugs are missing their spots! Solve the sums and draw the right number of dots onto each ladybug (you can also colour them in).

1.  +  = 

2.  +  = 

3.  ×  ×  = 

4.  -  -  = 

5.  -  = 