

SHARING IS CARING


Help each group of friends divide things between each other so that everyone is treated fairly.



1. Emily has 12 cupcakes and wants to share them equally among 4 friends. How many cupcakes will each friend get?




2. Bongani has 9 toys and wants to divide them equally among 3 friends. How many toys will each friend get?




3. Palesa has 8 stickers and wants to put an equal number on 2 lunchboxes. How many stickers will go on each lunchbox?



4. Tashvir has 15 crayons and wants to share them equally among 3 friends. How many crayons will each friend get?



5. Ben has 12 cookies and wants to divide them equally among 3 friends. How many cookies will each friend get?



6. Hanneli has 6 pencils and wants to share them equally among 3 friends. How many pencils will each friend get?

